


SNAP


Number Sense Percent greater than 100 (e.g. 140%)

Name: _____

Date: _____




Count **forwards**
by ____ from the
number.



<p>Draw to represent the value of the number:</p>	<p>Write to describe your picture:</p>
<p>Create 3 equations that equal the number:</p>	<p>Write the number in expanded form:</p>
	<p>Write a real life example that shows the value of the number:</p>

Count **backwards**
by ____ from the
number.

Show where the number belongs on the number line.



Reflect:

Communicating & Representing:
Drawing, description, expanded form

1 2 3 4

Understanding & Solving:
3 equations

1 2 3 4

Connecting & Reflecting:
Real-life

1 2 3 4

Reasoning & Analyzing:
Skip counting & number line

1 2 3 4

1 - Emerging 2 - Developing 3 - **Proficient** 4 - Extending