


SNAP

Number Sense (Thousandths to Billions)


Name: _____

Date: _____

Count **forwards**
by _____ from the
number.




Draw to represent the value of the number:	Write to describe your picture:
Create 3 equations that equal the number:	Write the number in expanded form:
	Write a real life example that shows the value of the number:



Count **backwards**
by _____ from the
number.

Show where the number belongs on the number line.



Reflect:

Communicating & Representing	Understanding & Solving	Connecting & Reflecting	Reasoning & Analyzing
Drawing, Description, Expanded Form	3 Equations	Real Life	Skip Counting & Number Line
Emerging Developing	Emerging Developing	Emerging Developing	Emerging Developing
Proficient Extending	Proficient Extending	Proficient Extending	Proficient Extending