


SNAP

Number Sense


Name: _____

Date: _____

Count forwards by _____ from the number.




Draw to represent the value of the number:	Write to describe your picture:
Write the number in expanded form:	
Create 3 equations that equal the number:	Write a real life example that shows the value of the number:



Count backwards by _____ from the number.

Show where the number belongs on the number line.



Reflect:

Communicating & Representing	Understanding & Solving	Connecting & Reflecting	Reasoning & Analyzing
Entire Assessment	Represent & Calculate	Real-life & reflection	Estimate
Emerging Developing	Emerging Developing	Emerging Developing	Emerging Developing
Proficient Extending	Proficient Extending	Proficient Extending	Proficient Extending