



SNAP


Number Sense (0 - 100)

Name: _____

Date: _____

Draw to represent the value of the number:

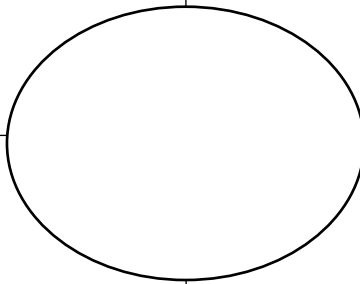
Write the number in expanded form:




Count **backwards** by _____ from the number.

Create 3 equations that equal the number:


Write a real life example that shows the value of the number:



Count **forwards** by _____ from the number.



Show where the number belongs on the number line.



Communicating & Representing:
Drawing, description, expanded form

1 2 3

Understanding & Solving:
3 equations

1 2 3

Connecting & Reflecting:
Real-life

1 2 3

Reasoning & Analyzing:
Skip counting & number line

1 2 3