



Name: \_\_\_\_\_

Date: \_\_\_\_\_




Count <b>forwards</b> by _____ from the number.

<b>Draw to represent the value of the number:</b>	<b>Write to describe your picture:</b>
<b>Create 3 equations that equal the number:</b>	<b>Write the number in expanded form:</b>
<b>Write a real life example that shows the value of the number:</b>	

[illegible]

Show where the number belongs on the number line.

A horizontal number line with arrows at both ends, indicating it extends infinitely in both directions. It is currently empty, with no tick marks or numbers.

**Reflect:**

Communicating & Representing:  
*Drawing, description, expanded form*

1 2 3

### Understanding & Solving: 3 equations

1 2 3

### Connecting & Reflecting: *Real-life*

1 2 3

Reasoning & Analyzing:  
*Skip counting & number line*

1 2 3